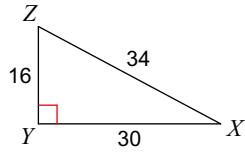


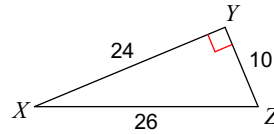
Assignment

Find the value of each trigonometric ratio.

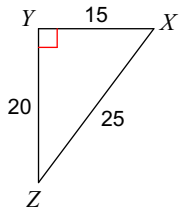
1)  $\cos Z$



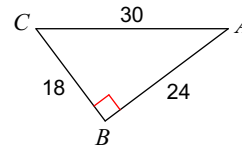
2)  $\cos X$



3)  $\tan X$

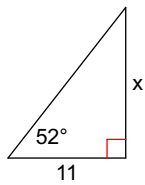


4)  $\sin A$

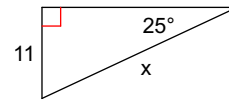


Find the missing side. Round to the nearest tenth.

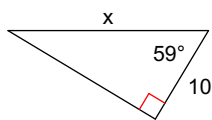
5)



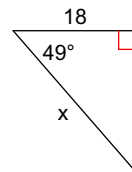
6)



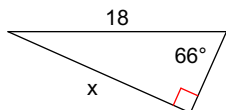
7)



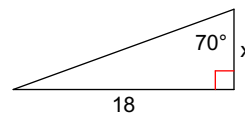
8)



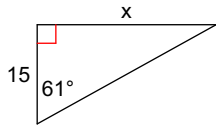
9)



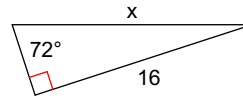
10)



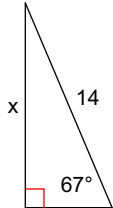
11)



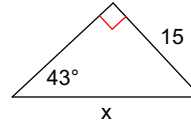
12)



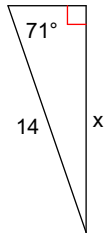
13)



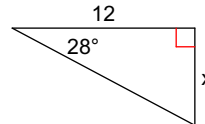
14)



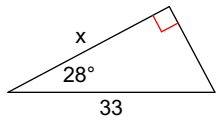
15)



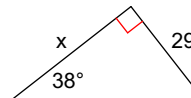
16)



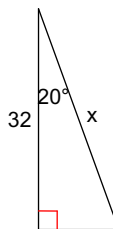
17)



18)



19)



20)

