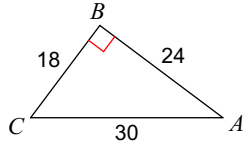


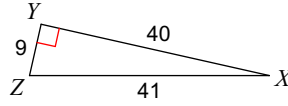
Right Triangle Trig Practice

Find the value of each trigonometric ratio to the nearest ten-thousandth.

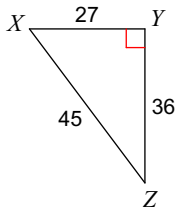
1) $\sin C$



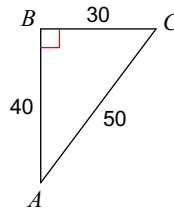
2) $\cos X$



3) $\tan Z$

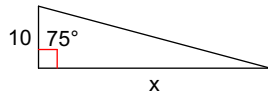


4) $\tan C$

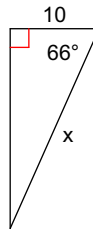


Find the missing side. Round to the nearest tenth.

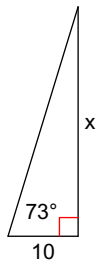
5)



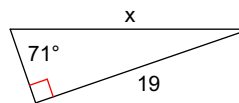
6)



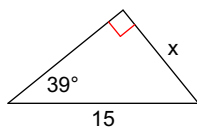
7)



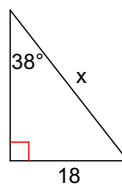
8)



9)



10)



Find the measure of the indicated angle to the nearest degree.

